

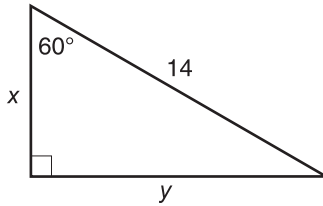
Practice

Student Edition
Pages 559–563

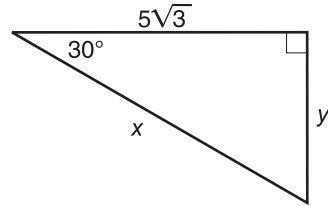
30° - 60° - 90° Triangles

Find the missing measures. Write all radicals in simplest form.

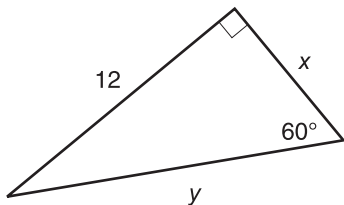
1.



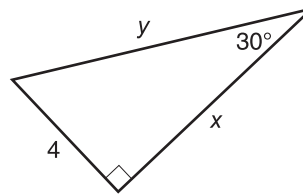
2.



3.



4.



5. One side of an equilateral triangle measures 6 cm. Find the measure of an altitude of the triangle.

6. Find the missing measures in the triangle. Write all radicals in simplest form.

