

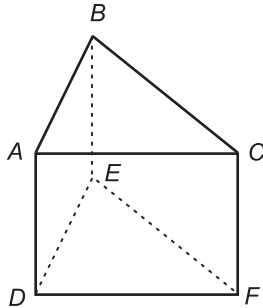
## Practice

Student Edition  
Pages 496–501

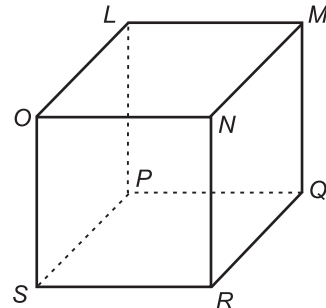
### Solid Figures

Name the faces, edges, and vertices of each polyhedron.

1.

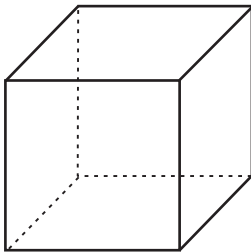


2.

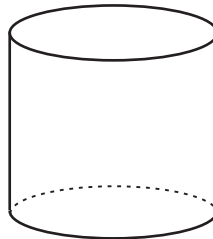


Identify each solid.

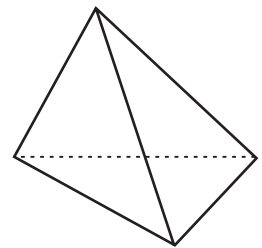
3.



4.



5.



Determine whether each statement is true or false for the solid.

6. The figure is a prism.
7. The figure is a polyhedron.
8. Pentagon  $ABCDE$  is a lateral face.
9. The figure has five lateral faces.
10. Pentagon  $ABCDE$  is a base.

